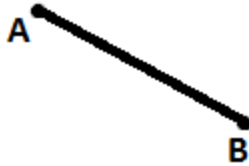


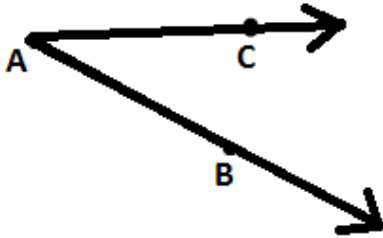
Name: _____
Date: _____
Class: _____

Geometry
Unit C
HW C-1

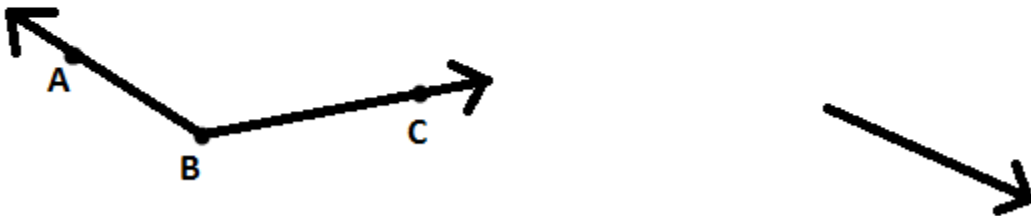
1) Copy the following line segment (and leave all construction marks)



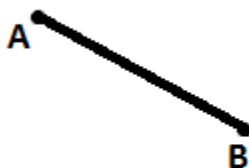
2) Bisect the following angle (and leave all construction marks)



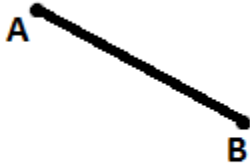
3) Copy the following angle (and leave all construction marks)



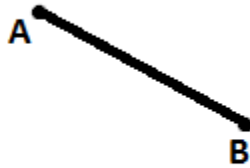
4) Bisect the following line segment (and leave all construction marks)



5) Create an equilateral \triangle using \overline{AB} (leave all construction marks)



6) Create an isosceles triangle \triangle using \overline{AB} as the base (leave all construction marks)



7) Create an isosceles \triangle using \overline{AB} as a leg (leave all construction marks)

