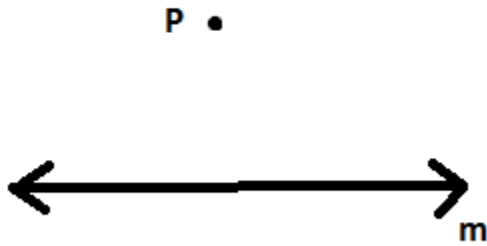


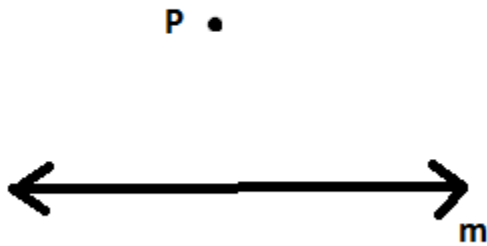
Name: \_\_\_\_\_  
Date: \_\_\_\_\_  
Class: \_\_\_\_\_

Geometry  
Unit C  
HW C-2

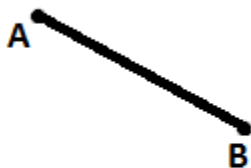
- 1) Create a line parallel to the  $\overleftrightarrow{m}$  that passes through P (and leave all construction marks)



- 2) Create a line  $\perp$  to  $\overleftrightarrow{m}$  that passes through P (leave all construction marks)



- 3) Construct a square using segment AB as one of its sides.



4) Create a line  $\perp$  to  $\overleftrightarrow{m}$  that passes through P (leave all construction marks)



5) Construct a parallelogram (that is not a square) using segment AB as one of its sides.

